

Smiley Face Math  
Grade 1 Worksheet III

Name: \_\_\_\_\_



1. Put numbers below each sea creature to show how many "legs" it has. Then circle the creature with the smallest number of "legs".



\_\_\_\_\_



\_\_\_\_\_



\_\_\_\_\_

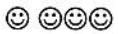
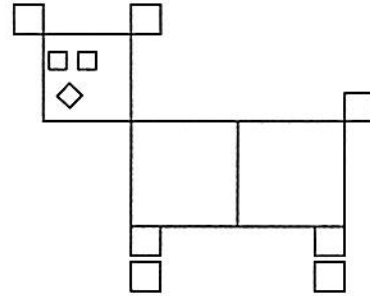


\_\_\_\_\_



2. How many squares did it take to draw the dog picture?

Answer: \_\_\_\_\_ squares



3. Four girls are trying out for the talent show. Maria is shorter than Alice but taller than Beth. Juanita is shorter than Beth. Circle Juanita. Draw a rectangle around Alice.



4. The first grade class went on a field trip to the zoo. They saw 1 lion and 2 giraffes. How many legs did they see on those animals?

Answer: They saw \_\_\_\_\_ legs.





5. The Tigers scored 3 goals in a game. The Eagles scored 7 goals in the game. Which team won, and by how many goals?

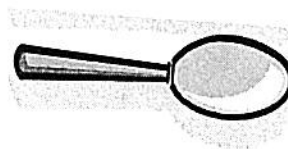


Answer: The \_\_\_\_\_ won by \_\_\_\_\_ goals.



6. In April 2008, Joe Allison balanced 16 spoons on his face earning him a place in the Guinness Book of World Records. If 9 spoons fell off Joe's face, how many would he still be balancing on his face?

Answer: \_\_\_\_\_ spoons would still be on his face.



7. Gracie has six tennis balls. Bailey has 14 tennis balls. How many more tennis balls does Bailey have than Gracie?



Gracie's tennis balls

Answer: Bailey has \_\_\_\_\_ more balls than Gracie.



8. Zaria read for 27 minutes on Saturday and 15 minutes on Sunday. How many minutes did she read over the weekend?



Answer: She read \_\_\_\_\_ minutes over the weekend.